



EYES


Sharing and halving

Year 1


- Recognise a half of an object, shape and amount
- Find a half
- Recognise and name a quarter an object, shape and amount
- Find a quarter

Half of a Shape

These objects and shapes are split in **half**.

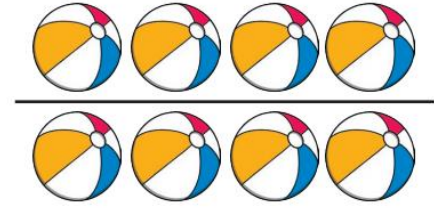


Each whole has **2 equal parts**.




Half of a Group

There are 8 balls. Half of 8 is 4.

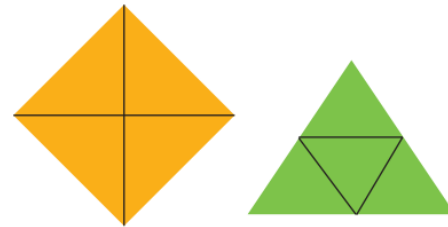
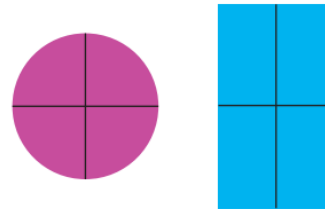


There are 10 balloons. Half of 10 is 5.



Quarter of a Shape

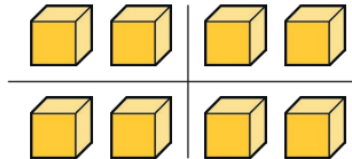
These shapes are split into **quarters**.



Each whole has **4 equal parts**.

Quarter of a Group

There are 8 blocks.
There are 2 in each quarter.
A quarter of 8 is 2.



Capacity and Fractions



The bottle is a quarter full.

The jar is half full.



Key Vocabulary	
Equal	Unequal
Whole	Parts
Half	Quarter
Split	Share
Group	